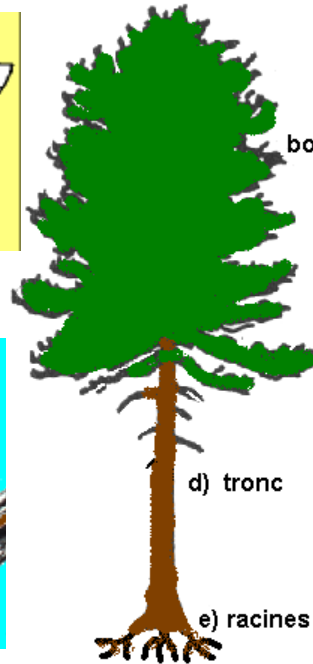
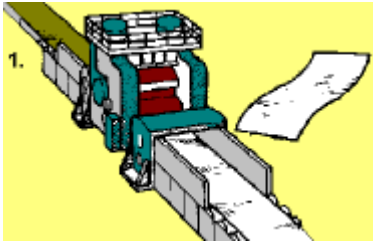


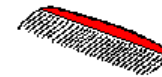
Identifier la partie de l'arbre qui est utilisée pour les applications suivantes :



- a) pulpe
- b) hydrolyse
- c) distillation



4.



plastique




caoutchouc  
synthétique

5.

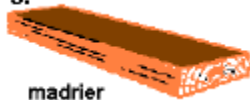


acide  
acétique



huiles et solvants

3.

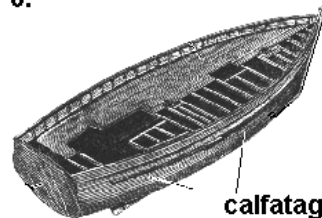


madrier



planches

6.



calfatage